

Use the vectors labeled in the first graph to answer the following problems. (10 points each)

73. Graph & label the resultant vector when vectors A and E are added together.


73a. What is the final (x,y) coordinate? _____ (5 pts ea)

74. Graph the resultant vector when vectors A, D and B are added together.

74a. What is the final (x,y) coordinate? _____ (5 pts ea)

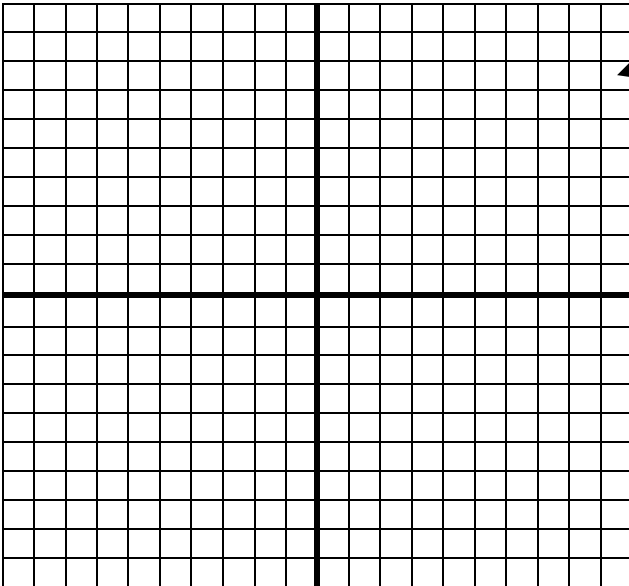

75. Graph the resultant vector when vectors A, B, C, and E are added together.

75a. What is the final (x,y) coordinate? _____ (10 pts ea)




76.

77.



78

79.



Use the vectors labeled in the first graph to answer the following problems. (10 points each)

76. Graph & label the resultant vector when vectors C and E are added together.

73a. What is the final (x,y) coordinate? _____ (5 pts ea)

77. Graph the resultant vector when vectors C, D and B are added together.

74a. What is the final (x,y) coordinate? _____ (5 pts ea)

78. Graph the resultant vector when vectors A, B, C, D and E are added together.

75a. What is the final (x,y) coordinate? _____ (10 pts ea)

79. Graph the resultant vector when vectors A, C, D and E are added together

75a. What is the final (x,y) coordinate? _____ (10 pts ea)